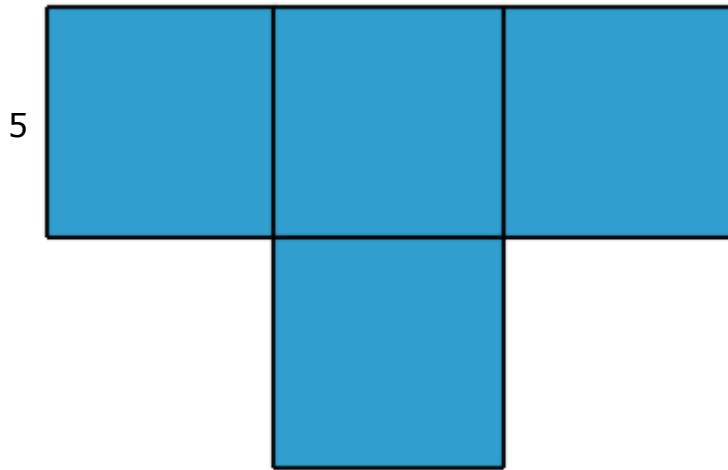
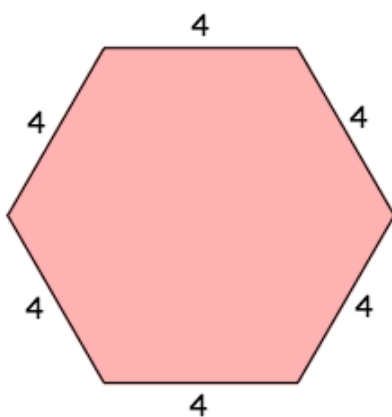


Omtrek en oppervlakte (basisschool)

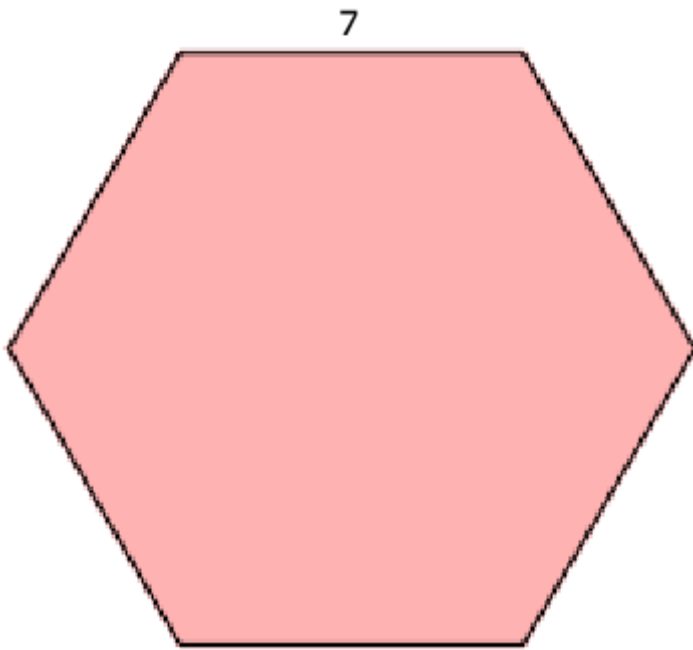


Omtrek: _____

Oppervlakte: _____



Omtrek: _____

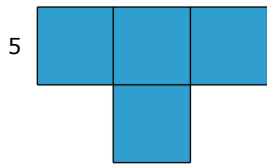


Omtrek: _____



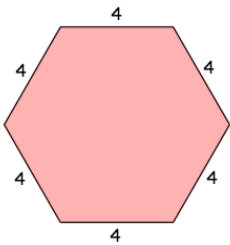
Omtrek: _____

Antwoorden

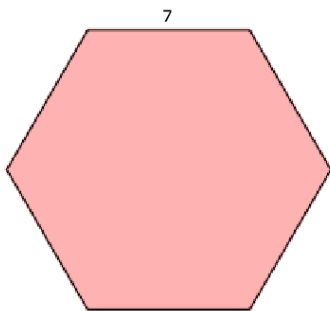


Omtrek: $10 \times 5 = \mathbf{50}$

Oppervlakte: **4**



Omtrek: $6 \times 4 = \mathbf{24}$



Omtrek: $6 \times 7 = \mathbf{42}$



Omtrek: $3 + 6 + 3 + 6 = \mathbf{18}$